

Vánoční matematika

Vypočítej příklady.

Každý obrázek má své číslo.

Pro vypočítání příkladů, použij čísla pod obrázky.

 16	 60	 40	 3
---	---	---	---

$$\text{Christmas tree} + \text{Candy cane stocking} = \underline{\hspace{2cm}}$$

$$\text{Gift} + \text{Snowman} = \underline{\hspace{2cm}}$$

$$\text{Snowman} - \text{Christmas tree} = \underline{\hspace{2cm}}$$







$$\text{Candy cane stocking} - \text{Gift} = \underline{\hspace{2cm}}$$




$$\text{Candy cane stocking} + \text{Christmas tree} + \text{Gift} = \underline{\hspace{2cm}}$$

$$\text{Snowman} + \text{Candy cane stocking} - \text{Christmas tree} = \underline{\hspace{2cm}}$$




$$\text{Candy cane stocking} + \text{Candy cane stocking} = \underline{\hspace{2cm}}$$


















		
		
		








80  ○  ○  ○

40  ○  ○  ○

30  ○  ○  ○

 +  = 12
 +  = 13
 +  +  = 17
 +  +  = ?

 +  = 18
 +  + 3 = 19
 = ?

 +  = 
 -  = 13
 2 +  = 7
 = ?

2

5